

Name: \_\_\_\_\_ Date: \_\_\_\_\_ Course number: \_\_\_\_\_  
**MAKE SURE YOUR TA OR TI STAMPS EVERY PAGE BEFORE YOU START!**

Lab section: \_\_\_\_\_ Partner's name(s): \_\_\_\_\_ Grade: \_\_\_\_\_

# Experiment 6

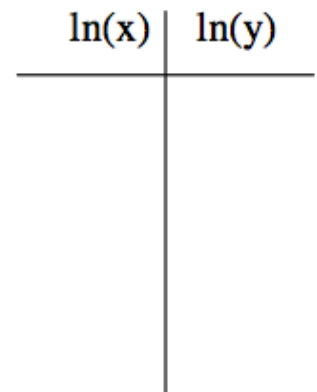

## Coulomb's Law - PRELAB

### 0. Pre-lab Homework (2 points)

*The pre-lab homework must be handed to the lab TA at the start of the lab.*

1. Why is it important to recharge the spheres before each measurement?

2. Consider the function  $y = x^n$  (for  $n = -2$ ). Take the natural logarithm of both sides and plot  $\ln(y)$  vs.  $\ln(x)$  on the graph below. Explain or show how to obtain "n" from the graph. (Hint: Can you fit the graph below to a straight line?) (use  $x=1, 2, 3, 4, 5, 6$ )



# Experiment 6

## Coulomb's Law – THE EXPERIMENT

### 1. Purpose

The purpose is to verify the proportionality of Coulomb's Law, that is, to verify that the electric force between two point charges is directly proportional to the product of the charges and is indirectly proportional to the square of the distance between them.

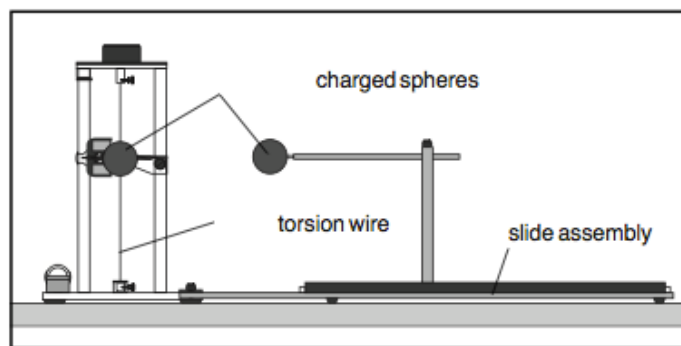
### 2.1 Introduction

Coulomb's Law gives us the static electrical force  $F$ , exerted by point charge  $Q_1$  on another point charge  $Q_2$  in terms of  $r$ , the distance between them:

$$F = \frac{1}{4\pi\epsilon_0} \frac{Q_1 Q_2}{r^2}$$

Equation 6.1

The PASCO Model ES-9070 Coulomb Balance (Figure 1) is a delicate torsion balance that can be used to investigate the force between charged objects. A conductive sphere is mounted on a rod, counterbalanced, and suspended from a thin torsion wire. An identical sphere is mounted on a slide assembly so it can be positioned at various distances from the suspended sphere.



**Figure 1. Experimenting with the Coulomb Balance**

To perform the experiment, both spheres are charged, and the sphere on the slide assembly is placed at fixed distances from the equilibrium position of the suspended sphere. The electrostatic force between the spheres causes the torsion wire to twist. The experimenter then twists the torsion wire to bring the balance back to its equilibrium position. The angle

**MAKE SURE TA & TI STAMPS EVERY PAGE BEFORE YOU START**

through which the torsion wire must be twisted to reestablish equilibrium is directly proportional to the electrostatic force between the spheres.

## 2.2 Theory

Take one gram of protons and place them one meter away from one gram of electrons. The resulting force is equal to  $1.5 \times 10^{23}$  Newtons-roughly the force it would take to lift an object from the surface of the Earth that had a mass about 1/5 that of the moon-not a small force.

So, if such small amounts of charge produce such enormous forces, why does it take a very delicate torsion balance to measure the force between charged objects in the laboratory? In a way, the very magnitude of the forces is half the problem. The other half is that the carriers of the electrical force-the tiny proton and the even tinier electron-are so small, and the electrons are so mobile. Once you separate them, how do you keep them separated? The negatively charged electrons are not only drawn toward the positively charged protons; they also repel each other. Moreover, if there are any free electrons or ions between the separated charges, these free charges will move very quickly to reduce the field caused by the charge separation.

So, since electrons and protons stick together with such tenacity, only relatively small charge differentials can be sustained in the laboratory. This is so much the case that, even though the electrostatic force is more than a billion-billion-billion-billion times as strong as the gravitational force, it takes a very delicate torsion balance to measure the electrical force, whereas we can measure the gravitational force by weighing an object with a spring balance.

## 3. Laboratory Work

### 3.1 Procedural Outline

The verification of Coulomb's Law proceeds as follows. A diagram can be found in Figure 6.1.

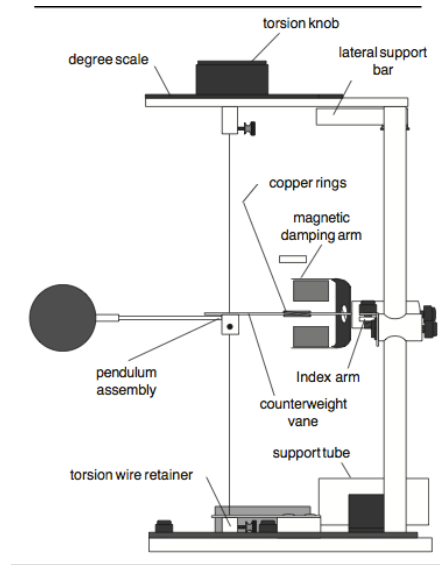
1. Charges are placed on the spherical conductors with a high voltage power supply.
2. Due to the presence of the charge, a force is induced between the two spheres.
3. The force ( $F$ ) between the spheres will produce a deflection ( $\theta$ ) of the sphere attached to the torsion fiber. These two quantities are related in the following way,

$$F = k\theta$$

Equation 6.2

Where  $k$  is the *torsion constant* of the fiber, it is not the *coulomb constant* (which we call  $k_1$ )

4. The charge dependence is measured by altering the charge of one sphere, keeping the spheres' separation constant, and measuring the resulting change in  $\theta$  (Thus inferring F).
5. The separation (R) dependence is measured by charging the spheres and measuring the resulting change in  $\theta$  (thus inferring F) for various separations, R.



**Figure 6.1**

**Basic Experimental Relationships:**

$$F_{coulomb} = k_1 \frac{Q_1 Q_2}{r^2}$$

In one test, we only change one charge. Hence the detectable change is

$$\Delta F = k_1 \frac{(\Delta Q_1)(Q_2)}{r^2} \text{ , or } \Delta F_{coulomb} = k_2 (\Delta Q_1) \text{ meaning } F_{coulomb} \propto Q_1 \text{ .}$$

Similarly, we only change the distance (r) in the another test.

$$\Delta F_{coulomb} = k_1 \frac{Q_1 Q_2}{(\Delta r)^2} \text{ Meaning } \Delta F_{coulomb} = k_3 \frac{1}{(\Delta r)^2} \text{ . Hence we see the relationship}$$

$F \propto \frac{1}{r^2}$  . We also know that the force on the fiber is directly proportional to

the the displacement ( $\theta$ ) using equation 6.2. Equating the force on the torsion fiber to the Coulomb force yields the following:

$$\theta \propto \frac{1}{r^2} \text{ and } \theta \propto Q \text{ based on the logic above.}$$

### **3.2 Tips for Accurate Results**

-When performing experiments, stand directly behind the balance and at a maximum comfortable distance from it. This will minimize the effects of static charges that may collect on clothing.

- Avoid wearing synthetic fabrics, because they tend to acquire large static charges. Short sleeve cotton clothes are best, and a grounding wire connected to the experimenter is helpful.

-When charging the spheres, turn the power supply on, charge the spheres, then immediately turn the supply off. The high voltage at the terminals of the supply can cause leakage currents which will affect the torsion balance.

-When charging the spheres, hold the charging probe near the end of the handle, so your hand is as far from the sphere as possible. If your hand is too close to the sphere, it will have a capacitive effect, increasing the charge on the sphere for a given voltage. This effect should be minimized so the charge on the spheres can be accurately reproduced when recharging during the experiment.

-Surface contamination on the rods that support the charged spheres can cause charge leakage. To prevent this, avoid handling these parts as much as possible and occasionally wipe them with alcohol to remove contamination.

-There will always be some charge leakage. Perform measurements as quickly as possible after charging, to minimize the leakage effects.

-Recharge the spheres before each measurement.

### **3.3 Varying the separation $R$ between the centers of the spheres**

1. Carefully read over the tips for accurate results.

2. Be sure the spheres are fully discharged (touch them with a grounded probe) and move the sliding sphere as far as possible from the suspended sphere. Set the torsion dial to 0 C. Zero the torsion balance by appropriately rotating the bottom torsion wire retainer until the pendulum assembly is at its zero displacement position as indicated by the index marks.

3. To set the sliding sphere to the proper length on its slide arm, again ground both spheres. Next, position the slide arm so that the centimeter scale reads 3.8 cm (this distance is equal to the diameter of the spheres). Position the spheres by loosening the thumbscrew on top of the rod that supports the sliding sphere and sliding the horizontal support rod through the hole in the vertical support rod until the two spheres just touch. Tighten the

**MAKE SURE TA & TI STAMPS EVERY PAGE BEFORE YOU START**

thumbscrew. **NOTE!** Any residual charge on the spheres may cause the suspended sphere to rotate which will change the slide arm length from its proper length. To set the sliding sphere the proper distance on the sliding rod, the suspended sphere should NOT be allowed to rotate here once zeroed so you may need to hold it in position by placing an object next to the suspended sphere AFTER zeroing to prevent any rotation away from the slide sphere. Then move the slide to 3.8 cm. If the suspended sphere is held in position, you can simply extend the sphere on the slide arm until the two spheres touch. This will guarantee the proper slide arm length as any potential rotation that would change this distance is effectively prevented.

4. Set the spheres at maximum separation, charge both the spheres to a potential of 6 kV, using the charging probe. (One terminal of the power supply should be grounded.) Immediately after charging the spheres, turn the power supply off to avoid high voltage leakage effects.

5. Position the sliding sphere at a position of 20 cm (this will set the distance between the centers of the spheres to be 20 cm.). Adjust the torsion knob as necessary to balance the forces and bring the pendulum back to the zero position. Record the distance ( $R = 20$  cm) and the angle ( $\theta$ ) in Table 6.1.

6. Separate the spheres to their maximum separation, recharge them to the same voltage, then reposition the sliding sphere at a separation of 20 cm. Measure the torsion angle and record your results again. Repeat this measurement several times, until your result is repeatable to within  $\pm 1$  degree. Record all your results. You may not obtain such a tight grouping of measurements, but after a few repeats, a grouping should be noticeable. If not, keep repeating until one is noticeable. Disregard any drastic outliers from this grouping.

7. Repeat steps 4-6 for  $R$  equal to 14, 10, 9, 8, 7, 6, and 5 cm.

### **3.4 Varying the charge $Q_1$ (Method 1) - Use this method**

1. Be sure the spheres are fully discharged (touch them with a grounded probe) and move the sliding sphere as far as possible from the suspended sphere. Set the torsion dial to  $0 \times C$ . Zero the torsion balance by appropriately rotating the bottom torsion wire retainer until the pendulum assembly is at its zero displacement position as indicated by the index marks.
2. With the spheres still at maximum separation, charge both the spheres to a potential of 6 kV, using the charging probe. (One terminal of the power supply should be grounded.) Immediately after charging the spheres, turn the power supply off to avoid high voltage leakage effects.
3. Position the sliding sphere at a position of 8 cm. Adjust the torsion knob as necessary to balance the forces and bring the pendulum back to the zero position. Record the potential of the sliding sphere ( $Q_1$ ) and the angle ( $\theta$ ) in Table 6.2.
4. Separate the spheres to their maximum separation, recharge them to the same voltages, then reposition the sliding sphere at a separation of 8 cm. Measure the torsion angle and record your results again. Repeat this measurement several times, until your result is repeatable to within  $\pm 1$  degree. Record all your results.
- 5: Repeat steps 2-4 with the sliding sphere at 5, 4, 3, 2, and 1 kV, while keeping the suspended sphere at 6 kV. Recall that the charge on each sphere is proportional to the charging potential.

### **3.5 Varying the charge $Q_1$ (Method 2)- skip this we will not using method 2.**

1. Be sure the spheres are fully discharged (touch them with a grounded probe) and move the sliding sphere as far as possible from the suspended sphere. Set the torsion dial to  $0 \times C$ . Zero the torsion balance by appropriately rotating the bottom torsion wire retainer until the pendulum assembly is at its zero displacement position as indicated by the index marks.
2. With the spheres still at maximum separation, charge both the spheres to a potential of 6 kV, using the charging probe. (One terminal of the power supply should be grounded.) Immediately after charging the spheres, turn the power supply off to avoid high voltage leakage effects.
3. Position the sliding sphere at a position of 8 cm. Adjust the torsion knob as necessary to balance the forces and bring the pendulum back to the zero position. Record the potential of the sliding sphere ( $Q_1$ ) and the angle ( $\theta$ ) in Table 6.2.
4. Separate the spheres to their maximum separation, recharge them to the same voltages, then reposition the sliding sphere at a separation of 8 cm. Measure the torsion angle and record your results again. Repeat this measurement several times, until your result is repeatable to within  $\pm 1$  degree. Record all your results.
5. Now adjust the charge on the sliding sphere. To halve the charge on the sliding sphere ( $Q/2$ ), touch it with the provided conducting sphere on insulating thread. To halve the charge on the sliding sphere again (so it is at  $Q/4$ ), ground the conducting sphere on the grounding plate and then touch the conducting sphere to the sliding sphere. Repeat steps 2-4 with the sliding sphere at charges  $Q/2$ ,  $Q/4$ , and  $Q/8$ .



Name: \_\_\_\_\_ Date: \_\_\_\_\_ Course number: \_\_\_\_\_  
**MAKE SURE YOUR TA OR TI STAMPS EVERY PAGE BEFORE YOU START!**

Lab section: \_\_\_\_\_ Partner's name(s): \_\_\_\_\_ Grade: \_\_\_\_\_  
Setup Materials Confirmation: TA/TI Signature \_\_\_\_\_  
(Return all lab materials to original state to match image reference before Post-Lab will be accepted)

## Experiment 6

### Coulomb's Law – POST LAB REPORT (20 points)

*The post-laboratory work must be completed and handed to the lab TA at the end of the lab.*

#### 4. Post-laboratory Report

##### 4.1 The correction factor B:

The reason for the deviation from the inverse square relationship at short distances is that the charged spheres are not simply point charges. A charged conductive sphere, if it is isolated from other electrostatic influences, acts as a point charge. The charges distribute themselves evenly on the surface of the sphere, so that the center of the charge distribution is just at the center of the sphere. However, when two charged spheres are separated by a distance that is not large compared to the size of the spheres, the charges will redistribute themselves on the spheres so as to minimize the electrostatic energy. The force between the spheres will therefore be less than it would be if the charged spheres were actual point charges.

A correction factor B, can be used to correct for this deviation. Simply multiply each value of  $\theta$  by  $1/B$ , where

$$B = 1 - 4 \frac{a^3}{R^3}$$

where  $a$  equals the radius of the spheres (1.9 cm) and  $R$  is the separation between the centers of the spheres.

##### 4.2 Analysis of Force vs. Separation (10 points)

Record the data from section 3.3 in Table 6.1. Find your average  $\theta$  value,  $\theta_{\text{avg}}$ , for each  $R$  value. Now calculate the correction factor for each  $R$  using the above equation. Now using the equation  $\theta_{\text{corrected}} = \theta / B$ , calculate your corrected  $\theta$  average.


**MAKE SURE TA & TI STAMPS EVERY PAGE BEFORE YOU START**

**Table 6.1 (Section 3.3)**

R (cm)	$\theta$	$\theta_{avg}$	B	$\theta_{corrected}$	$1/R^2$	$\ln(R)$	$\ln(\theta_{corrected})$
20							
14							
10							
9							
8							
7							
6							
5							

Show one example of how you corrected your data. If you want to show all the calculations, you may do so.

Make a plot of  $\ln(\theta_{corrected})$  vs.  $\ln(R)$  (y vs. x !!) from table 6.1 on the grid below. Make a best-fit curve to the plotted data. Include axes labels.



What is the slope of the best fit line? Show your calculation below.

Do the results of the graph and slope indicate a “power law” ( $y=x^n$ )? If so, what is your best estimate of the exponent? How does your result compare with Coulomb’s Law in Eq.6.1? Hint: Consider what you did in Pre-lab Question #2 and Eq.6.2.

**4.3 Analysis Force vs. Charge (Method 1) (10 points)**

Record the data from section 3.4 in Table 6.2. Find your average  $\theta$  value,  $\theta_{avg}$ , for each Q value. Now calculate the correction factor B for 8 cm using the equation from Section 4.1. Now using the equation  $\theta_{corrected} = \theta / B$ , calculate your corrected  $\theta$  average.

Correction factor B for 8 cm: \_\_\_\_\_

**Table 6.2 (Section 3.4)**

Q (kV)	$\theta$	$\theta_{avg}$	$\theta_{corrected}$
6			
5			
4			
3			
2			
1			

Plot your data for deflection versus charge Q ( $\theta_{corrected}$  vs. Q) from Table 6.2 on the grid below (next page). Provide axes labels. Draw a best-fit curve (i.e. a line, smooth curve, etc.) to your data.




**MAKE SURE TA & TI STAMPS EVERY PAGE BEFORE YOU START**

**Table 6.3 (Section 3.5)**

Q	$\theta$	$\theta_{avg}$	$\theta_{corrected}$
1			
1/2			
1/4			
1/8			

Plot your data for deflection versus charge Q ( $\theta_{corrected}$  vs. Q) from Table 6.3 on the grid below. Provide axes labels. Draw a best-fit curve (i.e. a line, smooth curve, etc.) to your data.



Analyze your best-fit curve to the deflection vs. charge plot. What mathematical relationship exists (approximately) between the deflection and charge?

By recognizing the relationship set forth in Equation 6.2, what should the theoretical relationship be between the decay-corrected deflection and the charge according to Coulomb's Law? Why or why not does your data agree with Coulomb's law?