

Physics 113 - September 11, 2012

■ P.S. 2 due Thursday

■ 220 to 1 → I'm not evil but don't expect me to deal with detailed exceptions
That's why syllabus is as it is in part

Turn P.S. in at end of class on Thursday or in locker ASAP After ...
No promises if sdms showed into my B+L mail box
or under my office door or show up at 11 am Friday

■ Workshop section changes

Last time -

Always True

$$x - x_0 = \int_{t_0}^t v dt$$

$$v - v_0 = \int_{t_0}^t a dt$$

is F CONSTANT? F=ma

Assumes a = CONSTANT
this form also Assumes t₀ = 0

$$v = v_0 + at$$

$$x = x_0 + v_0 t + \frac{1}{2} at^2$$

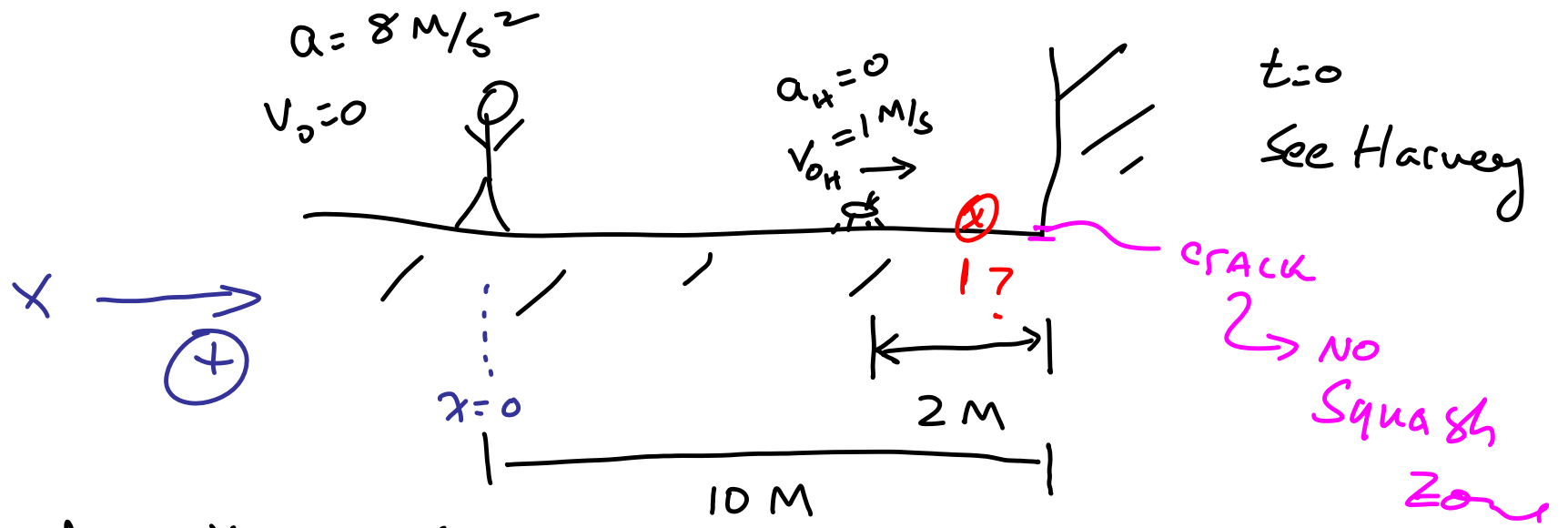
constant
Acceleration

Equations

$$x = x_0 + \left(\frac{v + v_0}{2} \right) t$$

$$v^2 = v_0^2 + 2a(x - x_0)$$

form may vary slightly ... easily understood if you take the trouble to understand the eqns and their origin



(a) does Harvey live to see another day?

Time of bug to wall

$$x = x_0 + v_0 t + \frac{1}{2} a t^2$$

$+10$ $+8$
 --- ---
 $2 \text{ m} = (1 \text{ m/s}) t$

$a=0$

$t = 2 \text{ s}$

Time of person to wall

$$x = x_0 + v_0 t + \frac{1}{2} a t^2$$

Annotations: $x_0 \rightarrow 10 \text{ m}$, $v_0 \rightarrow 0$, $a \rightarrow 8 \text{ m/s}^2$

$$10 = \frac{1}{2} 8 t^2$$



$$\underline{\underline{t = 1.6 \text{ s}}}$$

(b) where is the bug spot on rug?

$$x_H = x_{0H} + v_{0H} t_H + \frac{1}{2} a_H t_H^2$$

Annotations: $x_{0H} \rightarrow 8$, $v_{0H} \rightarrow 1 \text{ m/s}$, $a_H \rightarrow a = 0$

$$x_H = 8 + t_H$$

$$x_p = \cancel{x_{0p}} + \cancel{v_{0p}} t_p + \frac{1}{2} a_p t_p^2$$

$$x_p = \frac{1}{2} 8 t_p^2$$

at squash time

$$x_p = x_H$$

$$t_p = t_H$$

$$x = 8 + t$$

$$x = \frac{1}{2} 8 t^2$$

$$8 + t = \frac{1}{2} 8 t^2$$

$$\frac{1}{2} 8 t^2 - t - 8 = 0$$

$$t^2 - \frac{1}{4}t - 2 = 0$$

$$Ax^2 + Bx + C = 0 \rightsquigarrow x = \frac{-B \pm \sqrt{B^2 - 4AC}}{2A}$$

$$t = 1.54 \text{ s} \quad \text{or} \quad t = -1.3 \text{ s}$$

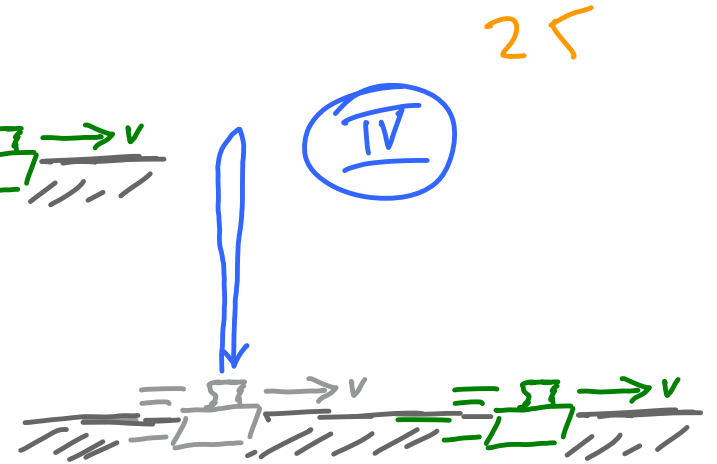
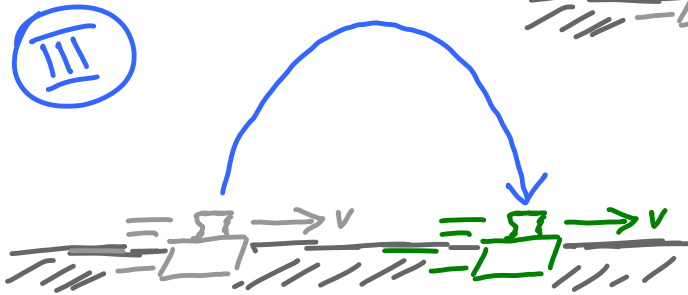
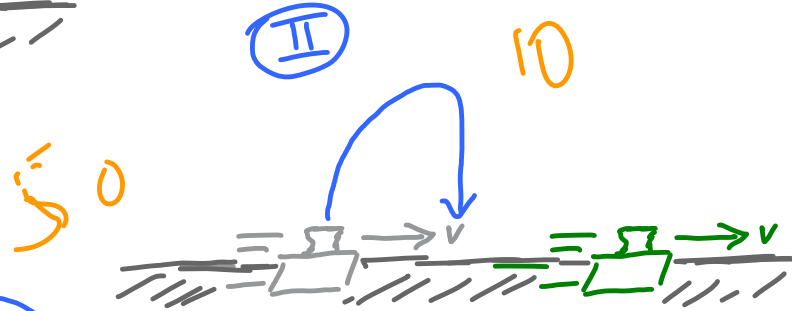

Obviously
correct one

2ND root makes
no physical
sense

$$x = 8 + t = 8 + 1.54$$


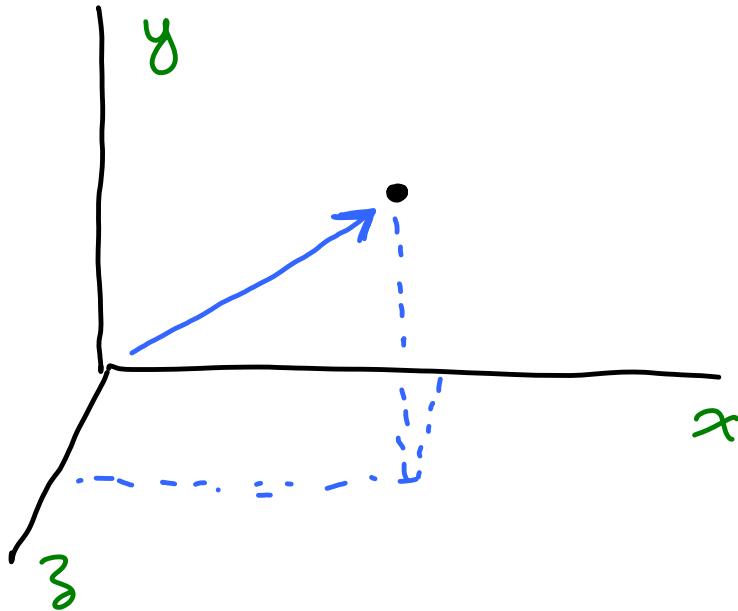
$$x_{\text{Harvey is sprayed}} = 9.54 \text{ m}$$

What path will ball take as
Cart moves from "launch" point
to "end" point (when ball returns
to cart level) ?




Scalars \leadsto #'s ... has magnitude

Vectors \leadsto magnitude and direction
3 #'s



$$\vec{A} = \text{vector} = (x, y, z)$$



vector addition

