

3-85

FOR THIS PROBLEM IT IS EASIER TO THINK ABOUT THINGS FROM THE POINT OF VIEW OF THE CAR (ITS REST FRAME).

IN THIS FRAME THE HELICOPTER (AND A DROPPED PACKAGE) APPEAR TO HAVE A HORIZONTAL VELOCITY EQUAL TO THE ~~OPPOSITE~~ DIFFERENCE IN THE VEHICLES' VELOCITIES

$$v' = 208 \text{ km/h} - 156 \text{ km/h} = (52 \text{ km/h}) \left(\frac{1000 \text{ m}}{1 \text{ km}} \right) \left(\frac{1 \text{ h}}{3600 \text{ s}} \right)$$

$$v' = 14.4 \text{ m/s}$$

WE ~~CAN~~ CAN FIND THE TIME FOR THE PACKAGE TO FALL FROM 78 m

$$y = y_0 + v_{0y}t + \frac{1}{2}a_y t^2$$

$$\begin{cases} y = 0 \text{ m} \\ y_0 = 78 \text{ m} \\ v_{0y} = 0 \text{ m/s} \\ a_y = -9.8 \text{ m/s}^2 \end{cases}$$

$$-78 \text{ m} = -\frac{1}{2}(9.8 \text{ m/s}^2)t^2$$

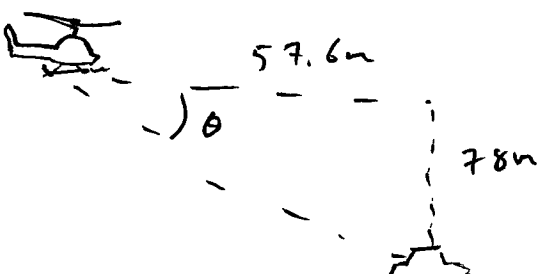
$$t = \sqrt{\frac{2 \cdot 78 \text{ m}}{9.8 \text{ m/s}^2}} \quad t = 4 \text{ s}$$

NOW WE CAN FIGURE OUT HOW FAR BEHIND THE CAR THE HELICOPTER MUST BE SO THAT THE CONTRABAND LANDS IN THE CAR

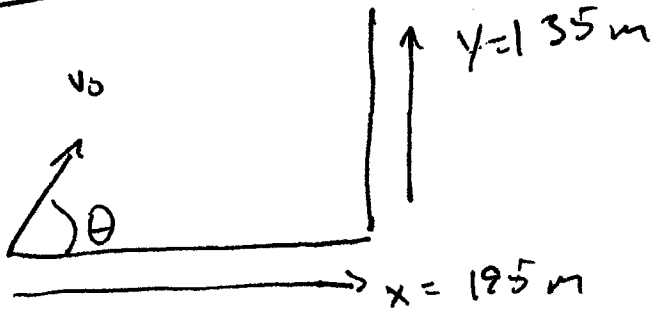
$$d = (14.4 \text{ m/s})(4 \text{ s}) = 57.6 \text{ m}$$

NOW WE CAN USE TRIG TO GET THE ANGLE

$$\theta = \arctan\left(\frac{78}{57.6}\right) = 54^\circ$$



3.88



$$y_0 = 0 \quad t = 6.6 \text{ s}$$

$$x_0 = 0$$

$$\vec{a} = -g \hat{j}$$

FIND v_0, θ

$$\cancel{v_0} \quad \underline{v_{0x}} \quad \cancel{v_0} \quad x = x_0 + v_{0x}t \rightarrow v_{0x} = \frac{x - x_0}{t} = \frac{x}{t}$$

$$v_{0x} = v_0 \cos \theta = \frac{x}{t} \quad (1)$$

FOR Y $y = y_0 + v_{0y}t + \frac{1}{2}a_y t^2$

$$\rightarrow y = v_0 \sin \theta t - \frac{1}{2}g t^2 \rightarrow v_0 \sin \theta = \frac{y + \frac{1}{2}g t^2}{t} \quad (2)$$

DIVIDE (2) BY (1)

$$\frac{v_0 \sin \theta}{v_0 \cos \theta} = \frac{\left(\frac{y + \frac{1}{2}g t^2}{t}\right)}{\left(\frac{x}{t}\right)} = \frac{y + \frac{1}{2}g t^2}{x}$$

$$\rightarrow \tan \theta = \frac{y + \frac{1}{2}g t^2}{x} \quad \text{PLUGGING IN #'S}$$

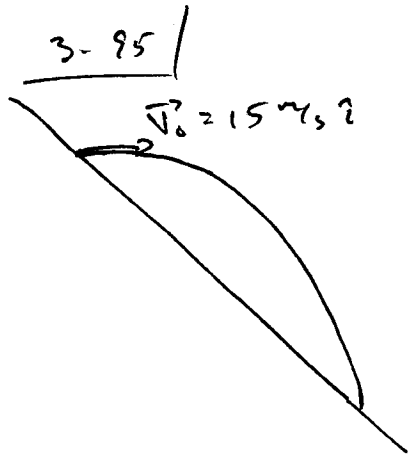
$$\theta = \arctan\left(\frac{135 + \frac{1}{2}(10)(6.6)^2}{195}\right)$$

$$\boxed{\theta = 61^\circ}$$

NOW, SINCE

$$v_0 \cos \theta = \frac{x}{t} \Rightarrow v_0 = \frac{x}{t \cos \theta} = \frac{195 \text{ m}}{(6.6 \text{ s}) \cos(61^\circ)}$$

$$\boxed{v_0 = 61 \text{ m/s}}$$



THE POSITION OF THE ROCK
WILL BE DESCRIBED AT ANY TIME
BY

$$x = x_0 + v_{0x}t + \frac{1}{2}a_x t^2 = (15 \text{ m/s})t$$

AND

$$y = y_0 + v_{0y}t + \frac{1}{2}a_y t^2 = (-4.9 \text{ m/s}^2)t^2$$

SINCE THE ANGLE OF THE HILL IS
 45° WE KNOW THAT $x_f = -y_f$

SO

$$(15)t = 4.9 t^2$$

$$t = \frac{15}{4.9} \approx 3 \text{ s}$$



NOTE THAT IN GRANCOLE
SOLUTION MANUAL HE PLUGS
IN THE WRONG VALUE FOR

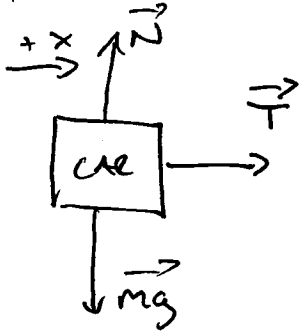
v_0 IN THE LAST STEP
(25 m/s INSTEAD OF 15 m/s)

AND THUS GETS THE WRONG
ANSWER.

$$t = 3 \text{ s IS CORRECT.}$$

ALSO, GRANCOLE'S SOLUTION IS JUST WEIRD.

4-4/ DRAW A FREE BODY DIAGRAM



NOW SUM THE FORCES
ACTING IN EACH DIRECTION

$$\sum F_x = T = ma_x \quad \sum F_y = N - mg = 0$$

~~$\sum F_x = 0 = ma_x$~~


$$\left\{ \begin{array}{l} N = mg \\ T = ma_x \end{array} \right\}$$

$$T = ma_x = (1210 \text{ kg})(1.20 \text{ m/s}^2)$$

$$T = 1452 \text{ N}$$

4-10 |

(a)



$$\text{WEIGHT} = |\vec{F}_g| = mg = (20 \text{ kg})(10 \text{ m/s}^2)$$

$$\boxed{\text{WEIGHT} = 200 \text{ N}}$$

SINCE BOX IS AT REST, $a = 0$

$$\text{THUS } \sum F = N - mg = 0$$

$$\rightarrow \boxed{N = mg \hat{j}} = 200 \text{ N}$$

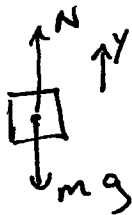

(b) FOR TABLE/BOTTOM BOX, TREAT BOTH BOXES AS A SINGLE MASS ($m = 30 \text{ kg}$)

$$\text{THEN } \vec{N} = (30 \text{ kg})(10 \text{ m/s}^2) \hat{j} = (300 \text{ N}) \hat{j}$$

FOR THE TOP BOX, IT IS THE SAME AS PART (a), BUT WITH $m = 10 \text{ kg}$

$$\vec{N} = (10 \text{ kg})(10 \text{ m/s}^2) \hat{j} = (100 \text{ N}) \hat{j}$$

4-18 |



APPLY THE SECOND LAW.

$$\sum F_y = N - mg = ma_y$$

$$a_y = \frac{N - mg}{m}$$

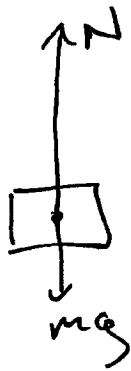
BUT $N = (0.75)mg$ SO

$$a_y = \frac{0.75mg - mg}{m}$$

$$a_y = -0.25g = \boxed{-2.5 \text{ m/s}^2 = a_y}$$

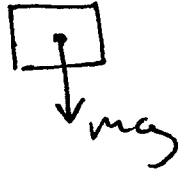
4-281

(a)



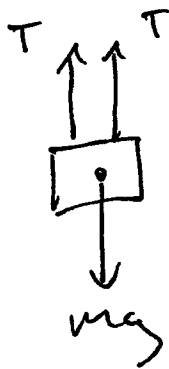
$N > mg$ (OTHERWISE HE CAN'T LEAVE THE GROUND)

(b)

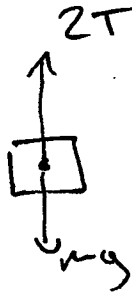


THERE AREN'T ANY MORE FORCES (ASSUMING HE ISN'T FOULED BY BEN WALLACE)

4-321



OR
 $\begin{matrix} \uparrow y \\ \rightarrow x \end{matrix}$



APPLY SECOND LAW

$$\sum F_y = 2T - mg = ma_y$$

(a) IF SHE WANTS TO MOVE AT A CONSTANT SPEED, $a_y = 0$ SO

$$2T - mg = ma_y \rightarrow 2T = mg$$

$$T = \frac{mg}{2}$$

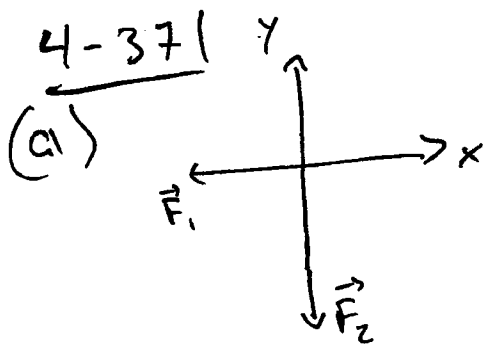
$$m = 72 \text{ kg} \rightarrow T = \frac{(72 \text{ kg})(10 \text{ m/s}^2)}{2} = \boxed{360 \text{ N}}$$

(b) IF $T^* = 1.15 T = 414 \text{ N}$

THEN

$$\sum F_y = 2T^* - mg = ma_y \rightarrow a_y = \frac{2T^* - mg}{m}$$

$$a_y = \frac{2(414 \text{ N}) - 720 \text{ N}}{72 \text{ kg}} = \boxed{1.5 \text{ m/s}^2}$$



$$\vec{F}_1 = -(10.2 \text{ N}) \hat{i}$$

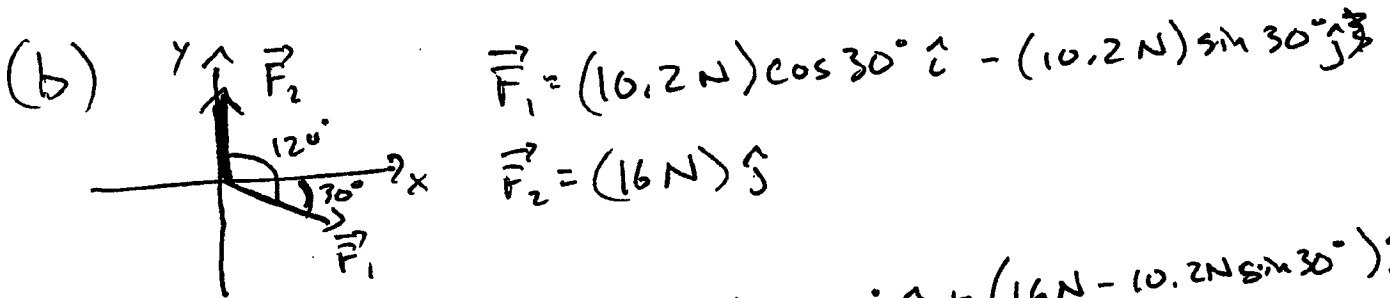
$$\vec{F}_2 = -(16 \text{ N}) \hat{j}$$

$$\vec{F}_{\text{NET}} = \vec{F}_1 + \vec{F}_2 = (-10.2 \text{ N}) \hat{i} + (-16 \text{ N}) \hat{j}$$

$$\vec{a} = \frac{\vec{F}_{\text{NET}}}{m}$$

$$\vec{a} = \left(\frac{-10.2 \text{ N}}{18.5 \text{ kg}} \right) \hat{i} + \left(\frac{-16 \text{ N}}{18.5 \text{ kg}} \right) \hat{j}$$

$$\vec{a} = (-0.6 \text{ m/s}^2) \hat{i} + (-0.9 \text{ m/s}^2) \hat{j}$$



$$\vec{F}_1 = (10.2 \text{ N}) \cos 30^\circ \hat{i} - (10.2 \text{ N}) \sin 30^\circ \hat{j}$$

$$\vec{F}_2 = (16 \text{ N}) \hat{j}$$

$$\vec{F}_{\text{NET}} = (10.2 \text{ N}) \cos 30^\circ \hat{i} + (16 \text{ N} - 10.2 \text{ N} \sin 30^\circ) \hat{j}$$

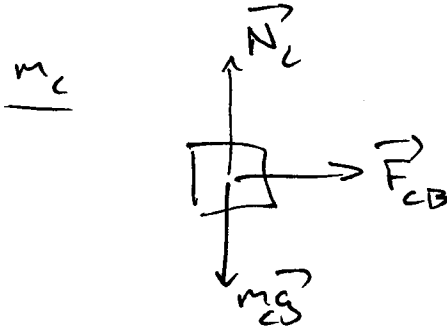
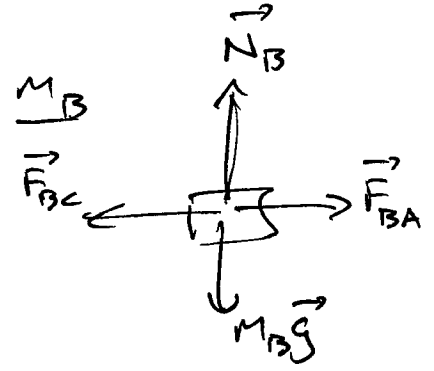
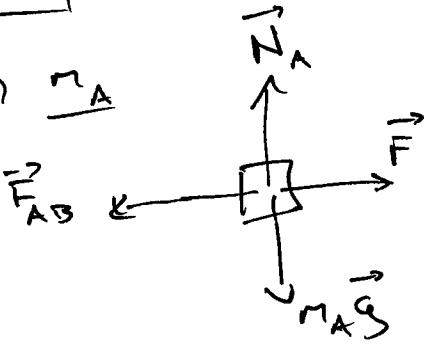
$$\vec{F}_{\text{NET}} = (8.8 \text{ N}) \hat{i} + (10.9 \text{ N}) \hat{j}$$

$$\vec{a} = \left(\frac{8.8 \text{ N}}{18.5 \text{ kg}} \right) \hat{i} + \left(\frac{10.9 \text{ N}}{18.5 \text{ kg}} \right) \hat{j}$$

$$\vec{a} \approx (0.5 \text{ m/s}^2) \hat{i} + (0.6 \text{ m/s}^2) \hat{j}$$

4-46

(a) m_A



(b) SINCE THE BLOCKS MOVE AS ONE
TREAT THE WHOLE SYSTEM AS
ONE BLOCK WITH $m = m_A + m_B + m_C$
THEN

$$\sum_i \vec{F} = \sum_i F_x = c F = (m_A + m_B + m_C) a \hat{i}$$

$$c = \frac{F}{(m_A + m_B + m_C)}$$

(c) SINCE $a = \frac{F}{m_A + m_B + m_C}$ FOR EACH
BLOCK AND $\vec{F} = m\vec{a}$ IN GENERAL,

$$F_A = m_A a = \frac{F m_A}{m_A + m_B + m_C}$$

$$F_B = m_B a = \frac{F m_B}{m_A + m_B + m_C}$$

$$F_C = m_C a = \frac{F m_C}{m_A + m_B + m_C}$$

4-46 (CONTINUED)

(d) FOR EACH BLOCK WE CAN SET THE NET FORCE EQUAL TO $m a$

→ BLOCK A: $F - F_{AB} = m_A a$

so $F_{AB} = -m_A a + F$

$$F_{AB} = F - \frac{m_A F}{m_A + m_B + m_C} = F \left(1 - \frac{m_A}{m_A + m_B + m_C} \right)$$

WE CAN SUBSTITUTE

$$1 = \frac{m_A + m_B + m_C}{m_A + m_B + m_C} \quad \text{AND TO GET}$$

$$F_{AB} = F \left(\frac{m_A + m_B + m_C}{m_A + m_B + m_C} - \frac{m_A}{m_A + m_B + m_C} \right)$$

$$F_{AB} = F \frac{m_B + m_C}{m_A + m_B + m_C} = -F_{BA}$$

→ BLOCK C

$$F_{CB} = m_C a = \frac{F m_C}{m_A + m_B + m_C}$$

$$F_{CB} = F \frac{m_C}{m_A + m_B + m_C} = -F_{BC}$$

4-46 (CONTINUED)

(c) IF $F = 96\text{ N}$, $m_A = m_B = m_C = 10\text{ kg}$

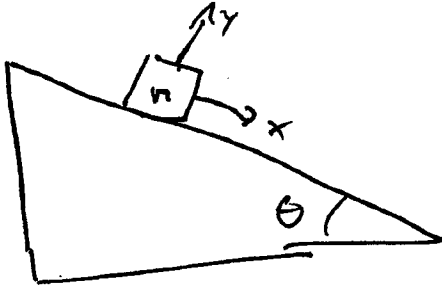
$$(b) a = \frac{96\text{ N}}{30\text{ kg}} = 3.20\text{ m/s}^2 = a$$

$$(c) F_A = (10\text{ kg})(3.20\text{ m/s}^2) = 32\text{ N} = F_A$$
$$F_B = (10\text{ kg})(3.20\text{ m/s}^2) = 32\text{ N} = F_B$$
$$F_C = (10\text{ kg})(3.20\text{ m/s}^2) = 32\text{ N} = F_C$$

$$(d) F_{AB} = -F_{BA} = (96\text{ N})\left(\frac{20\text{ kg}}{30\text{ kg}}\right) = 64\text{ N}$$

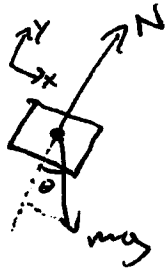
$$F_{CB} = -F_{BC} = (96\text{ N})\left(\frac{10\text{ kg}}{30\text{ kg}}\right) = 32\text{ N}$$

4-48



$$\theta = 22^\circ$$
$$m = 7 \text{ kg}$$

(a)




$$\sum F_x = mg \sin \theta = ma_x$$

$$a_x = g \sin \theta$$

$$a_x = (10 \text{ m/s}^2) \sin 22^\circ$$

$$a_x = 3.7 \text{ m/s}^2$$

(b)



$$(v_x^2 - v_{0x}^2) = 2a_x(x - x_0)$$

$$v_0 = 0$$

$$x_0 = 0$$

$$x = 12$$

$$a_x = 3.7 \text{ m/s}^2$$

$$\text{FIND } v$$

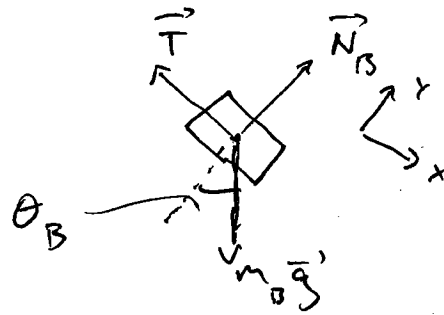
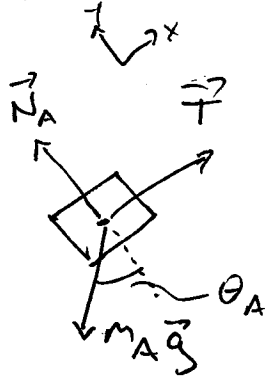
$$v_x^2 = 2(3.7 \text{ m/s}^2)(12 \text{ m} - 0 \text{ m}) + (0 \text{ m/s})^2$$

$$v_x = \sqrt{2(3.7 \text{ m/s}^2)(12 \text{ m})}$$

$$v_x = 9.4 \text{ m/s}$$

4-69 |

DRAW A FREE-BODY-DIAGRAM FOR EACH BLOCK



(a)

NOW USE NEWTON'S SECOND LAW

FOR BLOCK A

$$\textcircled{1} \quad \sum F_x = T - m_A g \sin(\theta_A) = m_A a$$

$$\textcircled{2} \quad \sum F_y = N_A - m_A g \cos(\theta_A) = \cancel{m_A} \cdot 0$$

FOR BLOCK B

$$\textcircled{3} \quad \sum F_x = m_B g \sin(\theta_B) - T = m_B a$$

$$\textcircled{4} \quad \sum F_y = N_B - m_B g \cos(\theta_B) = 0$$

REARRANGE $\textcircled{3}$ TO SOLVE FOR T

THEN PLUG IT INTO $\textcircled{1}$

$$T = m_B g \sin \theta_B - m_B a = m_B (g \sin \theta_B - a)$$

SO NOW $\textcircled{1}$ BECOMES

$$m_B (g \sin \theta_B - a) - m_A g \sin \theta_A = m_A a$$

~~$$m_B g \sin \theta_B - m_B a - m_A g \sin \theta_A = m_A a$$~~

$$\text{so, } a = \frac{m_B g \sin \theta_B - m_A g \sin \theta_A}{m_A + m_B}$$

4-69 (CONTINUED)

(b) TO BE AT REST $a=0$ SO

$$a=0 = g \left(\frac{m_B \sin \theta_B - m_A \sin \theta_A}{m_B + m_A} \right)$$

SOLVE FOR m_B

$$m_B \sin \theta_B - m_A \sin \theta_A = 0$$

$$m_B = \frac{m_A \sin \theta_A}{\sin \theta_B}, \quad \text{NOW PLUG IN}$$

$m_A = 5 \text{ kg}$
 $\theta_A = 32^\circ \quad \theta_B = 23^\circ$

$$m_B = (5 \text{ kg}) \frac{\sin(32^\circ)}{\sin(23^\circ)} = \boxed{6.8 \text{ kg} = m_B}$$

TO GET ~~FOR~~ TENSION PLUG THESE VALUES INTO EQUATION (3)

$$m_B g \sin(\theta_B) - T = m_B a$$

$$\begin{aligned} \rightarrow T &= m_B (g \sin \theta_B - a) \\ &= (6.8 \text{ kg}) (9.8 \text{ m/s}^2 \cdot \sin(23^\circ) - 0) \end{aligned}$$

$$\boxed{T = 26 \text{ N}}$$

(c) CONSTANT SPEED $\rightarrow a=0$ SO

FROM PART (b) WE HAD

$$m_B \sin \theta_B - m_A \sin \theta_A = 0 \quad \rightarrow \quad \frac{m_A}{m_B} = \frac{\sin \theta_B}{\sin \theta_A}$$

$$\frac{m_B}{m_A} = \frac{\sin(32^\circ)}{\sin(23^\circ)} = \frac{m_A}{m_B} = \frac{\sin(23^\circ)}{\sin(32^\circ)} = \boxed{0.74 = \frac{m_A}{m_B}}$$

4-741

$$\theta = 25^\circ$$



$$\sum F_x = -T \sin \theta = m a_x \quad (1)$$

$$\sum F_y = T \cos \theta - mg = m a_y \quad (2)$$

$a_y = 0$

FROM (1) $a_x = \frac{-T \sin \theta}{m}$

FROM (2) $T \cos \theta = mg \rightarrow T = \frac{mg}{\cos \theta}$

SUBSTITUTE T INTO a_x

$$a_x = -\left(\frac{mg}{m}\right)\left(\frac{\sin \theta}{\cos \theta}\right) \quad a_x = -g \tan \theta$$

SO NOW WE NEED THE VELOCITY.

USE

$$v = v_0 + at$$

$$v_0 = 0, t = 16s$$

$$v = -g \tan(25^\circ)(16s)$$

$$v = -75 \text{ m/s}$$